

# Thursday – quarter

A quarter

$\frac{1}{4}$

The top number tells you how many of the parts you need.

The bottom number tells you how many parts the whole is split into.

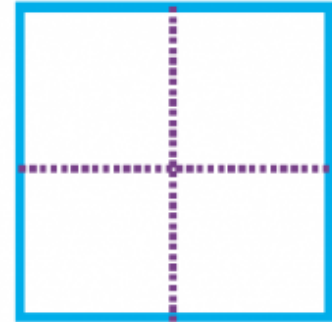
Whole			
Quarter $\frac{1}{4}$	Quarter $\frac{1}{4}$	Quarter $\frac{1}{4}$	Quarter $\frac{1}{4}$

1. Complete these sentences.

The whole is split into \_\_\_\_\_ equal parts.

Each part is called a \_\_\_\_\_

We show this with the fraction

2. Write the numbers of the shapes which show  $\frac{1}{4}$

1

2

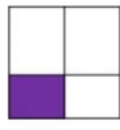
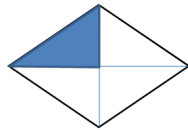

3

4

5

6

7



3.



This is a quarter of a shape. What is the whole shape? \_\_\_\_\_

4. Here is a running track. Vicky runs **a quarter** of the way and stops. Which coloured line shows where she stopped?



The \_\_\_\_\_ line shows where she stopped.

5. Ali tried to colour  $\frac{1}{4}$  of the shape.

What mistake has been made here? **The mistake is...**

