

Tuesday 7th July - Maths

1. Can you solve the following in 1 minute?

a) $30 + 20 = 50$ b) $80 - 20 = 60$ c) $40 + 5 = 45$ d) $75 - 5 = 70$ e) $70 + 30 = 100$

f) $100 - 40 = 60$ g) $65 + 10 = 75$ h) $105 - 10 = 95$ i) $120 + 5 = 125$ j) $130 - 5 = 125$

b) Solve the following.

5	7	1
+	1	2

a) $97 + 21 = 118$

e) $493 + 48 = 541$

b) $118 - 42 = 76$

f) $676 - 54 = 622$

c) $128 + 14 = 142$

g) $784 + 11 = 795$

d) $327 - 29 = 298$

h) $920 - 43 = 877$

c) Fill in the blanks with $<$, $>$ or $=$

a) $145 + 26 = 198 - 27$

d) $487 + 34 < 538 - 16$

b) $289 + 22 > 322 - 17$

e) $924 + 12 = 956 - 20$

Solve the following problem questions.

4. Amina and Fay went shopping. Amina has £60.00 to spend and Fay has £50.00 to spend.

a) Amina spends £43.00. How much money does she have left? **£17.00**




b) Fay spends all of her money and she borrows £13.00 from Amina. How much money does Fay spend altogether? **£63.00**

5. On sports day the Red team scores 458 points. The scores for the Blue and Green team are accidentally rubbed out. Answer the questions below to work out their scores.

a) The Blue team has 98 points more than the Red team. How many points does the Blue team have? **556**

b) The Green team has 87 less points than the Blue team. How many points does the Green team have? **469**

Rosie has added or subtracted ones to get this answer.

Hundreds	Tens	Ones
		

What could her calculation have been?

Her starting numbers are between and include 340 and 350.

What strategy could you use?

$340 + 2, 341 + 1, 342 + 0, 343 - 1, 344 - 2, 345 - 3, 346 - 4, 347 - 5, 348 - 6, 349 - 7, 350 - 8$